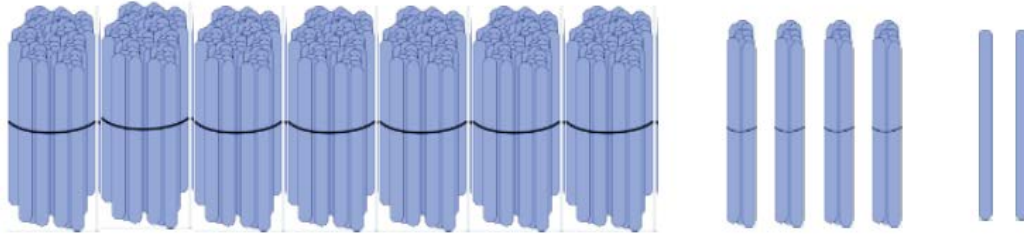
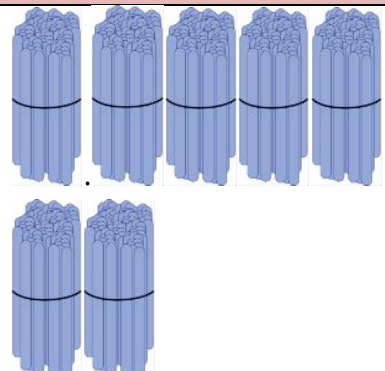
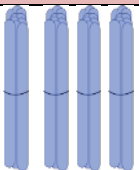



## Possible Solutions

These are bundles of hundreds, tens, and ones. Write the standard form, expanded form, and word form for the number of straws shown.



Hundreds	Tens	Ones
		

*7 hundreds*

*4 tens*

*2 ones*

- a) Standard Form: **742**
- b) Expanded Form: **700 + 40 + 2**
- c) Word Form: **Seven hundred forty-two**